


Fun With Math


Balance the tiles

Instruction: Switch one tile from A to B and another from B to A and make the sum of the tiles equal for both A and B. Write your final answer on the tiles.

Make the sum equal for both A and B




A balance scale with two pans, A (green) and B (purple). Pan A contains tiles with numbers 10, 3, and 1. Pan B contains tiles with numbers 4, 2, and 6. A blue panda is sitting on the top of pan B.




A balance scale with two pans, A (green) and B (purple). Both pans are empty. A blue panda is sitting on the top of pan B.

Make the sum equal for both A and B



A balance scale with two pans, A (blue) and B (pink). Pan A contains tiles with numbers 1, 3, and 5. Pan B contains tiles with numbers 6, 8, and 9. A yellow panda is sitting on the top of pan B.



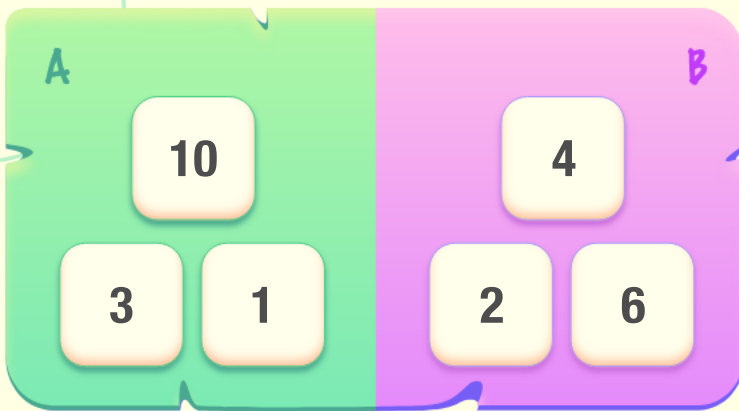
A balance scale with two pans, A (blue) and B (pink). Both pans are empty. A yellow panda is sitting on the top of pan B.

Answer Key

Balance the tiles

Instruction: Switch one tile from A to B and another from B to A and make the sum of the tiles equal for both A and B. Write your final answer on the tiles.

Make the sum equal for both A and B



Make the sum equal for both A and B

