

Fun With Math

Complete by finding the value of each symbol



+



=

8



+



=

?

21

+



=


28



= _____



= _____



+



=

?



+

2

=

8

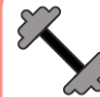


+



=

18



= _____



= _____




Answer Key

Complete by finding the value of each symbol

$$\begin{array}{ccc} \text{Store icon} \text{ (4)} + \text{Store icon} \text{ (4)} & = & 8 \\ \text{House icon} \text{ (7)} + \text{Store icon} \text{ (4)} & = & 11 \\ 21 + \text{House icon} \text{ (7)} & = & 28 \end{array}$$

$$\begin{array}{l} \text{Store icon} = 4 \\ \text{House icon} = 7 \end{array}$$



$$\begin{array}{ccc} \text{Clock icon} \text{ (9)} + \text{Wrench icon} \text{ (6)} & = & 15 \\ \text{Wrench icon} \text{ (6)} + 2 & = & 8 \\ \text{Clock icon} \text{ (9)} + \text{Clock icon} \text{ (9)} & = & 18 \end{array}$$

$$\begin{array}{l} \text{Wrench icon} = 6 \\ \text{Clock icon} = 9 \end{array}$$