



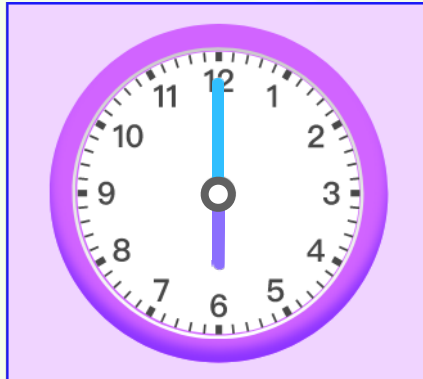
Name _____

Date _____

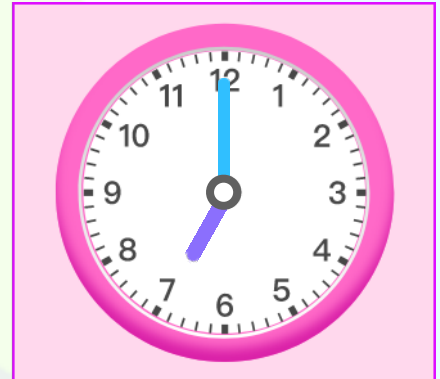
Circle the time shown on the clock



- A Nine o'clock
- B Eight o'clock
- C Seven o'clock



- A 06:00 p.m.
- B 07:00 p.m.
- C 04:00 p.m.



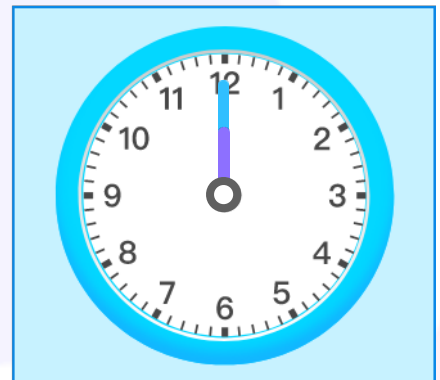
- A Seven o'clock
- B Five o'clock
- C Eight o'clock



- A 09:00 p.m.
- B 11:00 p.m.
- C 10:00 p.m.



- A Eleven o'clock
- B Ten o'clock
- C Twelve o'clock



- A 10:00 p.m.
- B 12:00 p.m.
- C 11:00 p.m.