



INFIQ GRADE 1 WORKSHEETS









Add Single Digit Numbers - Add 9

Name _____

Date _____

Find the total number of cupcakes

Count the number of cupcakes for each addition statement and write the sum.

	+		=	<input type="text"/>
	+		=	<input type="text"/>
	+		=	<input type="text"/>
	+		=	<input type="text"/>
	+		=	<input type="text"/>
	+		=	<input type="text"/>
	+		=	<input type="text"/>

Download the Curriculum-based **INFIQ** Digital Workbook from the App Store for **UNLIMITED QUESTIONS**