



Because Math Needs Practice



*Also available,
Comprehensive
Digital Math Workbook
For Grades 1-5*



A lot more curriculum-based worksheets at www.infiq.education

Grade 01

Add Single Digit Numbers

Add 5



INFIQ GRADE 1 WORKSHEETS

Add Single Digit Numbers - Add 5

Name _____

Date _____

Find the total number of stars for each group

Count the number of stars for each addition statement and write the sum.

	+		=	<input type="text"/>
	+		=	<input type="text"/>
	+		=	<input type="text"/>
	+		=	<input type="text"/>
	+		=	<input type="text"/>
	+		=	<input type="text"/>
	+		=	<input type="text"/>

Download the Curriculum-based **INFIQ** Digital Workbook from the App Store for **UNLIMITED QUESTIONS**



INFIQ GRADE 1 WORKSHEETS















Add Single Digit Numbers - Add 5

Name _____

Date _____

Find the total number of fish for each group

Count the number of fish for each addition statement and write the sum.

	+		=	<input type="text"/>
	+		=	<input type="text"/>
	+		=	<input type="text"/>
	+		=	<input type="text"/>
	+		=	<input type="text"/>
	+		=	<input type="text"/>
	+		=	<input type="text"/>

Download the Curriculum-based **INFIQ** Digital Workbook from the App Store for **UNLIMITED QUESTIONS**



INFIQ GRADE 1 WORKSHEETS

Add Single Digit Numbers - Add 5

Name _____

Date _____

Add the number of trees for each group and find the sum


Count the number of trees in each group and write the sum.

1




_____ + _____ =

2



_____ + _____ =

3




_____ + _____ =

4



_____ + _____ =

5



_____ + _____ =

6



_____ + _____ =

Download the Curriculum-based **INFIQ** Digital Workbook from the App Store for **UNLIMITED QUESTIONS**



INFIQ GRADE 1 WORKSHEETS

Add Single Digit Numbers - Add 5

Name _____

Date _____

Find the total number of balloons for each group

Count the number of balloons in each group and write the sum.

1



$$\underline{\quad} + \underline{\quad} = \boxed{\quad}$$

2



$$\underline{\quad} + \underline{\quad} = \boxed{\quad}$$

3



$$\underline{\quad} + \underline{\quad} = \boxed{\quad}$$

4



$$\underline{\quad} + \underline{\quad} = \boxed{\quad}$$

5



$$\underline{\quad} + \underline{\quad} = \boxed{\quad}$$

6



$$\underline{\quad} + \underline{\quad} = \boxed{\quad}$$

Download the Curriculum-based **INFIQ** Digital Workbook from the App Store for **UNLIMITED QUESTIONS**



INFIQ GRADE 1 WORKSHEETS


Add Single Digit Numbers - Add 5

Name _____

Date _____

Complete the addition sentence


Count the number of insects in each group and complete the addition sentence.



_____ + _____ = _____




_____ + _____ = _____




_____ + _____ = _____



_____ + _____ = _____



_____ + _____ = _____



_____ + _____ = _____

Download the Curriculum-based **INFIQ** Digital Workbook from the App Store for **UNLIMITED QUESTIONS**



INFIQ GRADE 1 WORKSHEETS


Add Single Digit Numbers - Add 5


Name _____


Date _____


Find the Sum


$$\begin{array}{r} 5 \\ + 1 \\ \hline \end{array}$$



$$\begin{array}{r} 4 \\ + 5 \\ \hline \end{array}$$



$$\begin{array}{r} 5 \\ + 8 \\ \hline \end{array}$$


$$\begin{array}{r} 2 \\ + 5 \\ \hline \end{array}$$



$$\begin{array}{r} 6 \\ + 5 \\ \hline \end{array}$$



$$\begin{array}{r} 3 \\ + 5 \\ \hline \end{array}$$



$$\begin{array}{r} 5 \\ + 0 \\ \hline \end{array}$$


$$\begin{array}{r} 5 \\ + 5 \\ \hline \end{array}$$


$$\begin{array}{r} 7 \\ + 5 \\ \hline \end{array}$$


$$\begin{array}{r} 5 \\ + 9 \\ \hline \end{array}$$


$$\begin{array}{r} 8 \\ + 5 \\ \hline \end{array}$$


$$\begin{array}{r} 5 \\ + 6 \\ \hline \end{array}$$

Download the Curriculum-based **INFIQ** Digital Workbook from the App Store for **UNLIMITED QUESTIONS**



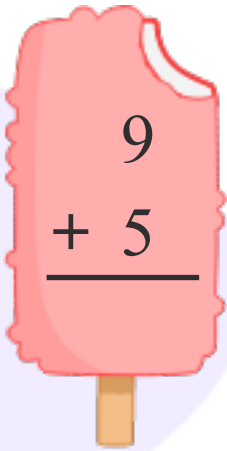
INFIQ GRADE 1 WORKSHEETS

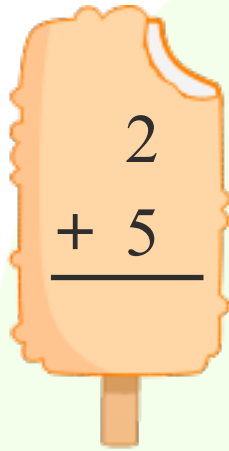
Add Single Digit Numbers - Add 5

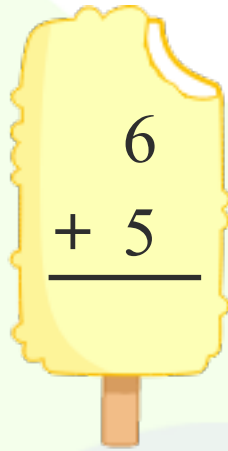
Name _____

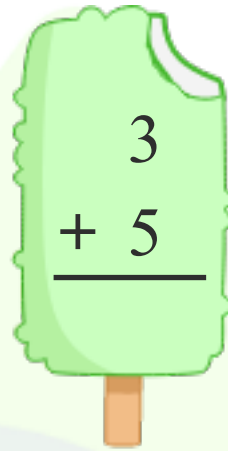
Date _____

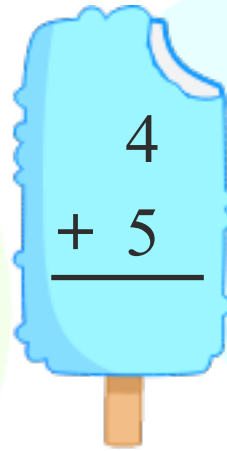
Add 5 to find the sum.

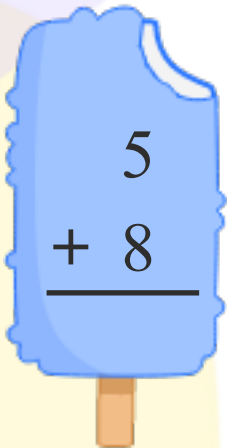

$$\begin{array}{r} 9 \\ + 5 \\ \hline \end{array}$$

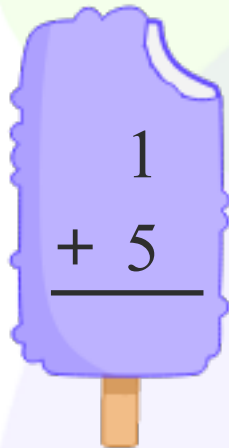

$$\begin{array}{r} 2 \\ + 5 \\ \hline \end{array}$$

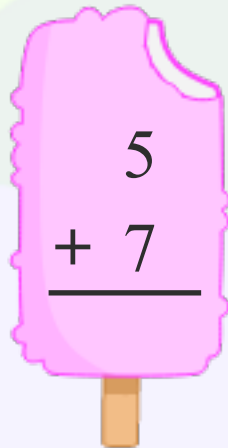

$$\begin{array}{r} 6 \\ + 5 \\ \hline \end{array}$$

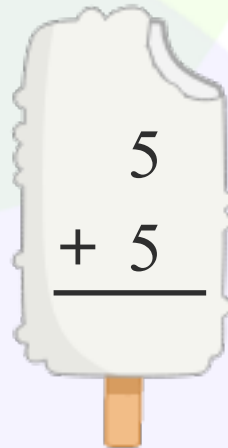

$$\begin{array}{r} 3 \\ + 5 \\ \hline \end{array}$$

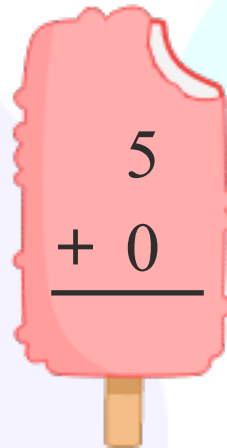

$$\begin{array}{r} 4 \\ + 5 \\ \hline \end{array}$$

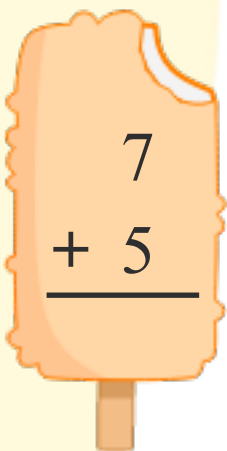

$$\begin{array}{r} 5 \\ + 8 \\ \hline \end{array}$$

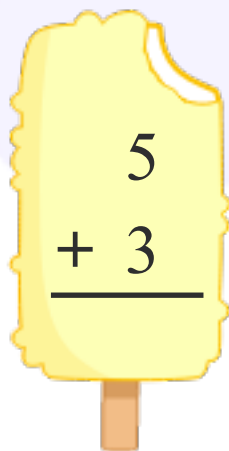

$$\begin{array}{r} 1 \\ + 5 \\ \hline \end{array}$$

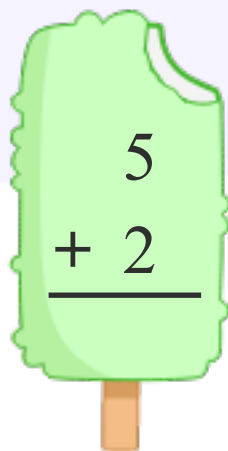

$$\begin{array}{r} 5 \\ + 7 \\ \hline \end{array}$$

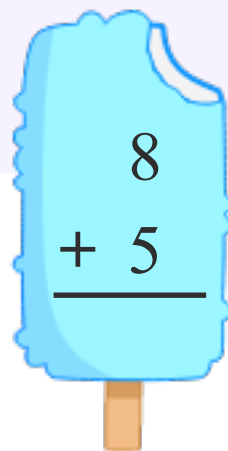

$$\begin{array}{r} 5 \\ + 5 \\ \hline \end{array}$$

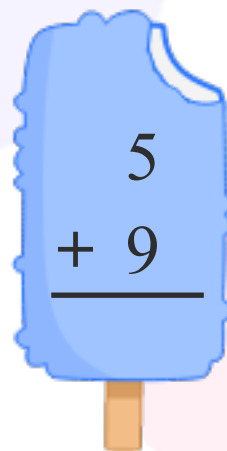

$$\begin{array}{r} 5 \\ + 0 \\ \hline \end{array}$$


$$\begin{array}{r} 7 \\ + 5 \\ \hline \end{array}$$


$$\begin{array}{r} 5 \\ + 3 \\ \hline \end{array}$$


$$\begin{array}{r} 5 \\ + 2 \\ \hline \end{array}$$


$$\begin{array}{r} 8 \\ + 5 \\ \hline \end{array}$$


$$\begin{array}{r} 5 \\ + 9 \\ \hline \end{array}$$

Download the Curriculum-based **INFIQ** Digital Workbook from the App Store for **UNLIMITED QUESTIONS**



INFIQ GRADE 1 WORKSHEETS

Add Single Digit Numbers - Add 5

Name _____

Date _____

Add **5** to a number.

$$5 + 6 = \square$$

$$5 + 5 = \square$$

$$3 + 5 = \square$$

$$5 + 1 = \square$$

$$5 + 8 = \square$$

$$2 + 5 = \square$$

$$4 + 5 = \square$$

$$5 + 0 = \square$$

$$5 + 7 = \square$$

$$9 + 5 = \square$$

Download the Curriculum-based **INFIQ** Digital Workbook from the App Store for **UNLIMITED QUESTIONS**



INFIQ GRADE 1 WORKSHEETS

Add Single Digit Numbers - Add 5

Name _____

Date _____

Add the numbers and write the sum.

$$\begin{array}{r} 5 \\ + 0 \\ \hline \end{array}$$

$$\begin{array}{r} 3 \\ + 5 \\ \hline \end{array}$$

$$\begin{array}{r} 5 \\ + 8 \\ \hline \end{array}$$

$$\begin{array}{r} 1 \\ + 5 \\ \hline \end{array}$$

$$\begin{array}{r} 7 \\ + 5 \\ \hline \end{array}$$

$$\begin{array}{r} 9 \\ + 5 \\ \hline \end{array}$$

$$\begin{array}{r} 5 \\ + 5 \\ \hline \end{array}$$

$$\begin{array}{r} 4 \\ + 5 \\ \hline \end{array}$$

$$\begin{array}{r} 5 \\ + 2 \\ \hline \end{array}$$

$$\begin{array}{r} 5 \\ + 6 \\ \hline \end{array}$$

$$\begin{array}{r} 5 \\ + 4 \\ \hline \end{array}$$

$$\begin{array}{r} 5 \\ + 9 \\ \hline \end{array}$$

Download the Curriculum-based **INFIQ** Digital Workbook from the App Store for **UNLIMITED QUESTIONS**



INFIQ GRADE 1 WORKSHEETS

Add Single Digit Numbers - Add 5

Name _____

Date _____

Add **5** to a number.

$$\begin{array}{r} 5 \\ + 1 \\ \hline \end{array}$$

$$\begin{array}{r} 5 \\ + 2 \\ \hline \end{array}$$

$$\begin{array}{r} 5 \\ + 8 \\ \hline \end{array}$$

$$\begin{array}{r} 0 \\ + 5 \\ \hline \end{array}$$

$$\begin{array}{r} 5 \\ + 6 \\ \hline \end{array}$$

$$\begin{array}{r} 5 \\ + 5 \\ \hline \end{array}$$

$$\begin{array}{r} 3 \\ + 5 \\ \hline \end{array}$$

$$\begin{array}{r} 5 \\ + 4 \\ \hline \end{array}$$

$$\begin{array}{r} 7 \\ + 5 \\ \hline \end{array}$$

$$\begin{array}{r} 9 \\ + 5 \\ \hline \end{array}$$

$$\begin{array}{r} 1 \\ + 5 \\ \hline \end{array}$$

$$\begin{array}{r} 2 \\ + 5 \\ \hline \end{array}$$

Download the Curriculum-based **INFIQ** Digital Workbook from the App Store for **UNLIMITED QUESTIONS**