





Name _____


Date _____


Subtract

Count the number of shapes that have not been struck out to find the difference.

	$\begin{array}{r} 6 \\ - 1 \\ \hline \end{array}$
---	---

	$\begin{array}{r} 3 \\ - 1 \\ \hline \end{array}$
--	---

	$\begin{array}{r} 9 \\ - 6 \\ \hline \end{array}$
--	---

	$\begin{array}{r} 7 \\ - 5 \\ \hline \end{array}$
--	---

	$\begin{array}{r} 10 \\ - 9 \\ \hline \end{array}$
---	--

	$\begin{array}{r} 8 \\ - 8 \\ \hline \end{array}$
--	---