



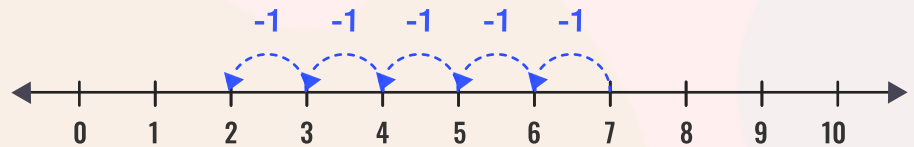
Name _____

Date _____

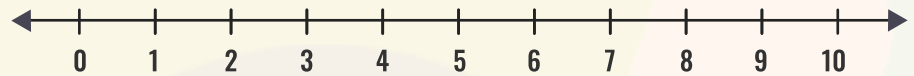
Subtract the numbers by using the number line.

Represent the subtraction on the number line by drawing as in the first example.

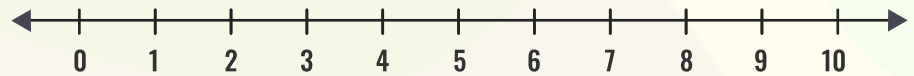
$$7 - 5 = \underline{2}$$



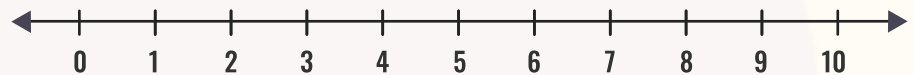
$$7 - 7 = \underline{\quad}$$



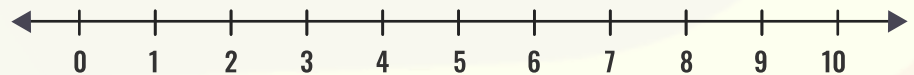
$$8 - 5 = \underline{\quad}$$



$$9 - 3 = \underline{\quad}$$



$$9 - 1 = \underline{\quad}$$



$$8 - 6 = \underline{\quad}$$

