

Grade 01

DOWNLOAD  
THE APP  
FROM  
THE  
APP  
STORE

MATH WORKBOOK

INFIQ



Because Math Needs  
Practice

More worksheets at [www.getinfiq.education](http://www.getinfiq.education)

Subtract Single Digit Numbers

Subtract 2

DOWNLOAD THE INFIQ APP FOR INFINITE QUIZZES








## Subtract Single Digit Numbers - Subtract 2

Name \_\_\_\_\_

Date \_\_\_\_\_

Subtract 2.


$$7 - 2 = \boxed{\phantom{00}}$$

$$4 - 2 = \boxed{\phantom{00}}$$

$$3 - 2 = \boxed{\phantom{00}}$$

$$5 - 2 = \boxed{\phantom{00}}$$

$$9 - 2 = \boxed{\phantom{00}}$$

$$6 - 2 = \boxed{\phantom{00}}$$





## Subtract Single Digit Numbers - Subtract 2


Name \_\_\_\_\_


Date \_\_\_\_\_


## Subtract 2.


|   |   |
|---|---|
|  | $\begin{array}{r} 8 \\ - 2 \\ \hline \end{array}$ |
|---|---|

|  |  |
|--|--|
|  | $\begin{array}{r} 10 \\ - 2 \\ \hline \end{array}$ |
|--|--|

|   |   |
|---|---|
|  | $\begin{array}{r} 6 \\ - 2 \\ \hline \end{array}$ |
|---|---|

|   |   |
|---|---|
|  | $\begin{array}{r} 7 \\ - 2 \\ \hline \end{array}$ |
|---|---|

|   |   |
|---|---|
|  | $\begin{array}{r} 3 \\ - 2 \\ \hline \end{array}$ |
|---|---|

|  |   |
|--|---|
|  | $\begin{array}{r} 9 \\ - 2 \\ \hline \end{array}$ |
|--|---|



## Subtract Single Digit Numbers - Subtract 2

Name \_\_\_\_\_

Date \_\_\_\_\_

Find the difference by subtracting 2.

| Tens | Ones     |
|------|----------|
|      | <b>6</b> |
| -    | <b>2</b> |
| —    |          |

| Tens | Ones     |
|------|----------|
|      | <b>5</b> |
| -    | <b>2</b> |
| —    |          |

| Tens | Ones     |
|------|----------|
|      | <b>3</b> |
| -    | <b>2</b> |
| —    |          |

| Tens | Ones     |
|------|----------|
|      | <b>9</b> |
| -    | <b>2</b> |
| —    |          |

| Tens | Ones     |
|------|----------|
|      | <b>7</b> |
| -    | <b>2</b> |
| —    |          |

| Tens | Ones     |
|------|----------|
|      | <b>8</b> |
| -    | <b>2</b> |
| —    |          |



## Subtract Single Digit Numbers - Subtract 2

Name \_\_\_\_\_

Date \_\_\_\_\_

Find the difference by subtracting 2.

| Tens | Ones |
|------|------|
| 1    | 0    |
| -    | 2    |
| —    |      |

| Tens | Ones |
|------|------|
|      | 6    |
| -    | 2    |
| —    |      |

| Tens | Ones |
|------|------|
|      | 8    |
| -    | 2    |
| —    |      |

| Tens | Ones |
|------|------|
|      | 3    |
| -    | 2    |
| —    |      |

| Tens | Ones |
|------|------|
|      | 4    |
| -    | 2    |
| —    |      |







| Tens | Ones |
|------|------|
|      | 9    |
| -    | 2    |
| —    |      |



## Subtract Single Digit Numbers - Subtract 2

Name \_\_\_\_\_

Date \_\_\_\_\_

**Subtract.**



## Subtract Single Digit Numbers - Subtract 2

Name \_\_\_\_\_

Date \_\_\_\_\_

**Subtract.**

$$\begin{array}{r} 7 \\ - 2 \\ \hline \end{array}$$

$$\begin{array}{r} 5 \\ - 2 \\ \hline \end{array}$$

$$\begin{array}{r} 10 \\ - 2 \\ \hline \end{array}$$

$$\begin{array}{r} 4 \\ - 2 \\ \hline \end{array}$$

$$\begin{array}{r} 8 \\ - 2 \\ \hline \end{array}$$

$$\begin{array}{r} 9 \\ - 2 \\ \hline \end{array}$$

$$\begin{array}{r} 2 \\ - 2 \\ \hline \end{array}$$

$$\begin{array}{r} 6 \\ - 2 \\ \hline \end{array}$$

$$\begin{array}{r} 3 \\ - 2 \\ \hline \end{array}$$





## Subtract Single Digit Numbers - Subtract 2

Name \_\_\_\_\_

Date \_\_\_\_\_

Subtract.

$$\begin{array}{r} 5 \\ - 2 \\ \hline \end{array}$$

$$\begin{array}{r} 7 \\ - 2 \\ \hline \end{array}$$

$$\begin{array}{r} 8 \\ - 2 \\ \hline \end{array}$$

$$\begin{array}{r} 10 \\ - 2 \\ \hline \end{array}$$

$$\begin{array}{r} 6 \\ - 2 \\ \hline \end{array}$$

$$\begin{array}{r} 3 \\ - 2 \\ \hline \end{array}$$

$$\begin{array}{r} 9 \\ - 2 \\ \hline \end{array}$$

$$\begin{array}{r} 2 \\ - 2 \\ \hline \end{array}$$

$$\begin{array}{r} 4 \\ - 2 \\ \hline \end{array}$$





## Subtract Single Digit Numbers - Subtract 2

Name \_\_\_\_\_

Date \_\_\_\_\_

Complete the following.

$9 - 2 = \underline{\quad}$

$3 - 2 = \underline{\quad}$

$6 - 2 = \underline{\quad}$

$5 - 2 = \underline{\quad}$

$10 - 2 = \underline{\quad}$

$7 - 2 = \underline{\quad}$

$3 - 2 = \underline{\quad}$

$4 - 2 = \underline{\quad}$

$8 - 2 = \underline{\quad}$

$10 - 2 = \underline{\quad}$

$5 - 2 = \underline{\quad}$

$6 - 2 = \underline{\quad}$



## Subtract Single Digit Numbers - Subtract 2

Name \_\_\_\_\_

Date \_\_\_\_\_

Complete the following.

$$10 - 2 = \underline{\quad}$$

$$9 - 2 = \underline{\quad}$$

$$8 - 2 = \underline{\quad}$$

$$7 - 2 = \underline{\quad}$$

$$6 - 2 = \underline{\quad}$$

$$5 - 2 = \underline{\quad}$$

$$4 - 2 = \underline{\quad}$$

$$3 - 2 = \underline{\quad}$$





## Subtract Single Digit Numbers - Subtract 2


Name \_\_\_\_\_


Date \_\_\_\_\_


Complete the following.



$$3 - 2 = \underline{\quad}$$



$$5 - 2 = \underline{\quad}$$



$$4 - 2 = \underline{\quad}$$


$$6 - 2 = \underline{\quad}$$


$$7 - 2 = \underline{\quad}$$


$$9 - 2 = \underline{\quad}$$


$$8 - 2 = \underline{\quad}$$


$$10 - 2 = \underline{\quad}$$